





Name _____

1. Kelly has 31 marbles. She gets 50 more marbles.
How many marbles does Kelly have now?

Which equation matches the story?

- (A) $31 + 10 = 17$
(B) $31 + 50 = 81$
(C) $81 + 10 = 91$
(D) $50 + 41 = 91$

2. Which nail is the longest?

- (A) 
(B) 
(C) 
(D) 

3. Count the tens and ones.
Which number is shown?

