

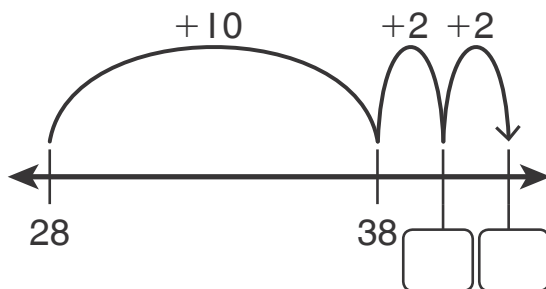
A-Z Vocabulary

1. You can choose a **strategy** to add.

$$28 + 14 = ?$$

One strategy: Use an open number line.

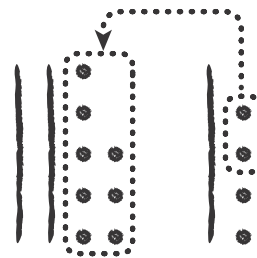
Start at 28. Add 14.



$$28 + 14 = \underline{\quad}$$

Another strategy: Draw tens and ones.


Make a ten if you can.



2. Find each sum. Solve any way you choose.

Draw or explain what you did.

$$35 + 16 = ?$$



$$35 + 16 = \underline{\quad}$$

$$53 + 19 = ?$$

$$53 + 19 = \underline{\quad}$$

On the Back!

3. Show two different strategies to find $45 + 15$. Which strategy do you like better? Explain.