


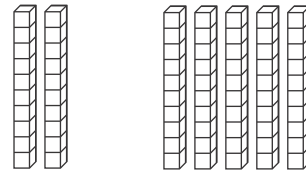
**AZ Vocabulary**

1. You can use what you know about adding **ones** to add **tens**.



2 ones and 5 ones are 7 ones.

$$2 + 5 = \underline{\quad}$$



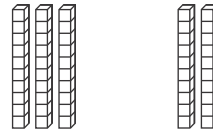
2 tens and 5 tens are 7 tens.

$$20 + 50 = \underline{\quad}$$

2. Write the numbers to complete each equation.



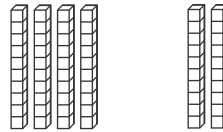
$$\underline{3} + \underline{2} = \underline{5}$$



$$\underline{30} + \underline{20} = \underline{50}$$



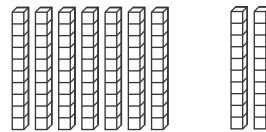
$$\underline{\quad} + \underline{\quad} = \underline{6}$$



$$\underline{\quad} + \underline{\quad} = \underline{60}$$



$$\underline{\quad} + \underline{\quad} = \underline{\quad}$$



$$\underline{\quad} + \underline{\quad} = \underline{\quad}$$

**On the Back!**

3. Explain the steps you can use to add  $30 + 50$ .  
Include a drawing.